



Evaluate each expression. Use a number line to find each solution.

1.  $14 - 17$




2.  $12 - (-10)$



3.  $-14 - (-6) =$



4.  $-19 + 24$



5.  $-26 + -19$



6.  $12 + (-9) - 15$



7.  $2 + (-15) + (-2)$



8.  $7 - (-7)$



9.  $-13 - 12$



10.  $-9 - (-15) + 5 + (-5)$

