

Name : _____

Score : _____

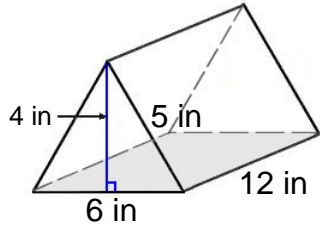
Teacher : _____

Date : _____

Surface Area of Prisms and Pyramids

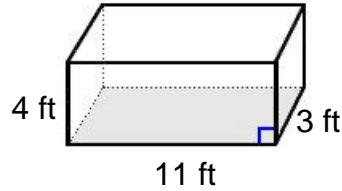
Find the surface area of each figure. Round answers to the nearest hundredth, if necessary.

1)



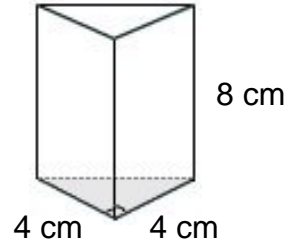
Surface Area: _____

2)



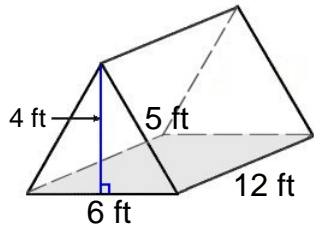
Surface Area: _____

3)



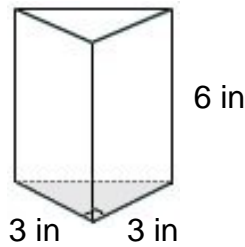
Surface Area: _____

4)



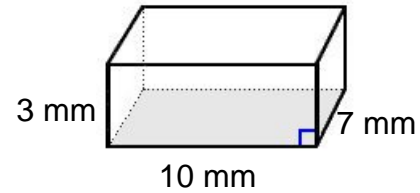
Surface Area: _____

5)



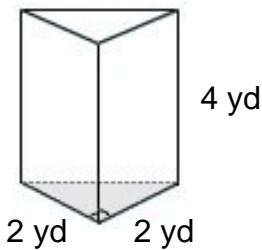
Surface Area: _____

6)



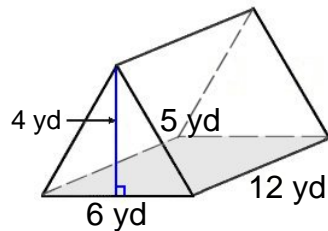
Surface Area: _____

7)



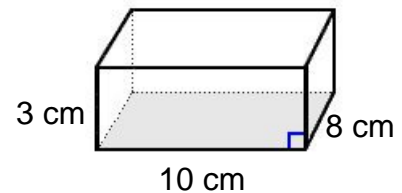
Surface Area: _____

8)



Surface Area: _____

9)



Surface Area: _____



Name : _____

Score : _____

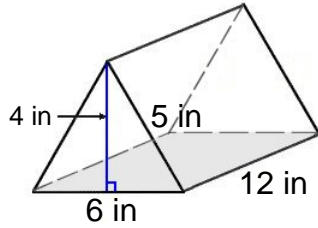
Teacher : _____

Date : _____

Surface Area of Prisms and Pyramids

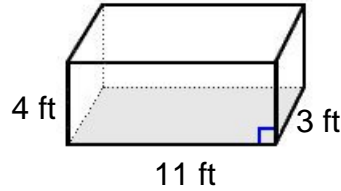
Find the surface area of each figure. Round answers to the nearest hundredth, if necessary.

1)



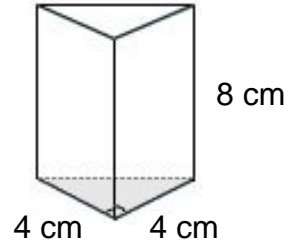
Surface Area: 216.00 in²

2)



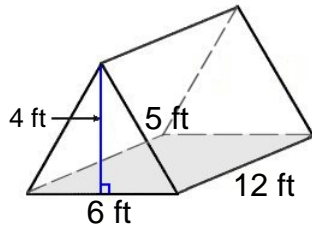
Surface Area: 178.00 ft²

3)



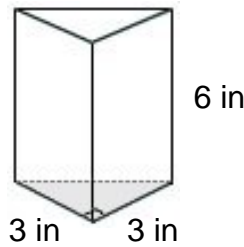
Surface Area: 125.25 cm²

4)



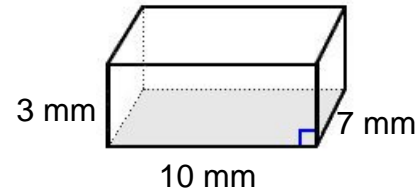
Surface Area: 216.00 ft²

5)



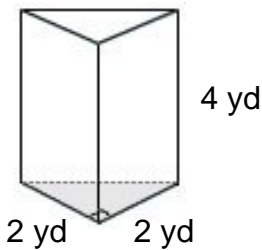
Surface Area: 70.46 in²

6)



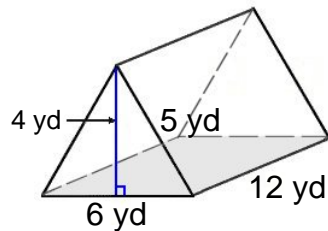
Surface Area: 242.00 mm²

7)



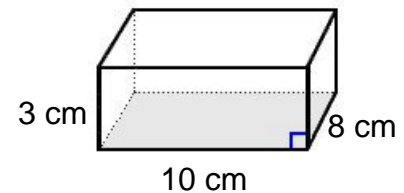
Surface Area: 31.31 yd²

8)



Surface Area: 216.00 yd²

9)



Surface Area: 268.00 cm²

