

Name : _____

Score : _____

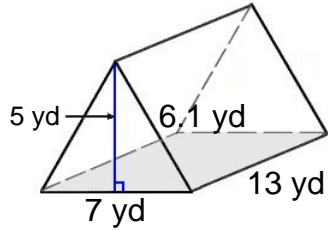
Teacher : _____

Date : _____

Surface Area of Prisms and Pyramids

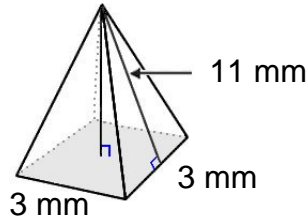
Find the surface area of each figure. Round answers to the nearest hundredth, if necessary.

1)



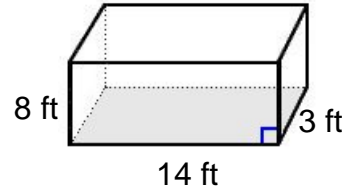
Surface Area: _____

2)



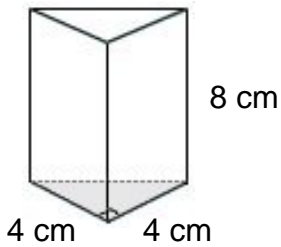
Surface Area: _____

3)



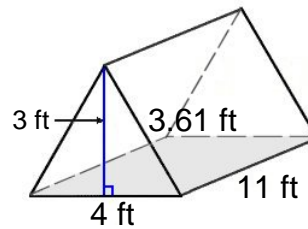
Surface Area: _____

4)



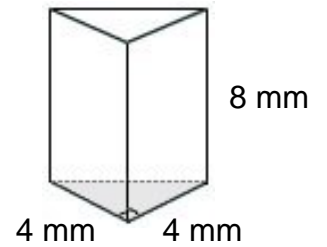
Surface Area: _____

5)



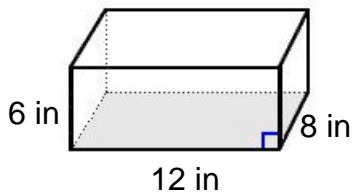
Surface Area: _____

6)



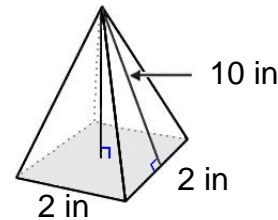
Surface Area: _____

7)



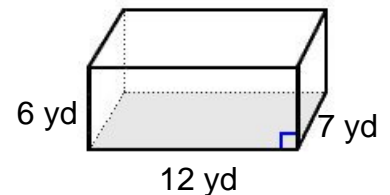
Surface Area: _____

8)



Surface Area: _____

9)



Surface Area: _____



Name : _____

Score : _____

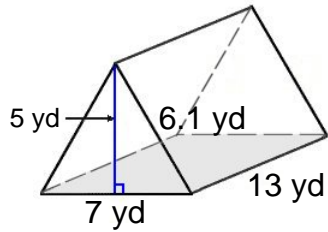
Teacher : _____

Date : _____

Surface Area of Prisms and Pyramids

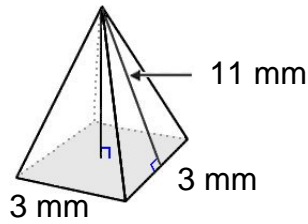
Find the surface area of each figure. Round answers to the nearest hundredth, if necessary.

1)



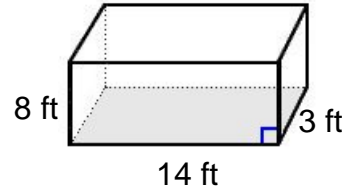
Surface Area: 284.60 yd²

2)



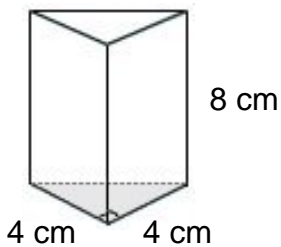
Surface Area: 75.00 mm²

3)



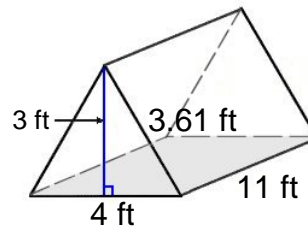
Surface Area: 356.00 ft²

4)



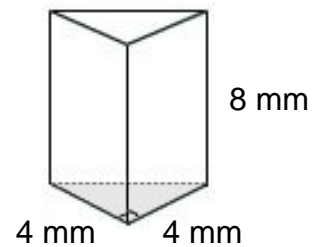
Surface Area: 125.25 cm²

5)



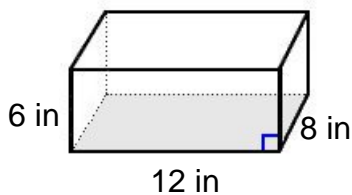
Surface Area: 135.42 ft²

6)



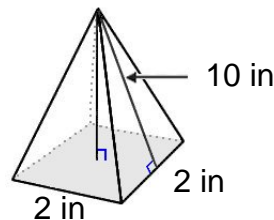
Surface Area: 125.25 mm²

7)



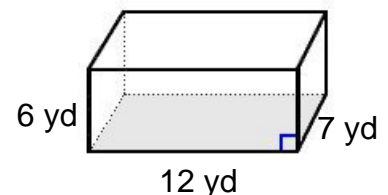
Surface Area: 432.00 in²

8)



Surface Area: 44.00 in²

9)



Surface Area: 396.00 yd²

