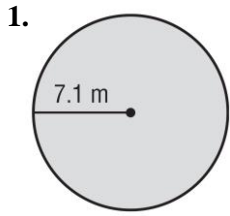
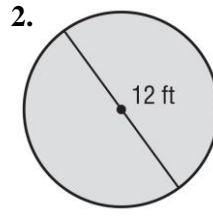


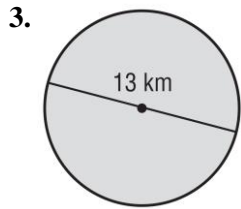
Find the area and circumference of each circle. Round to the nearest tenth.



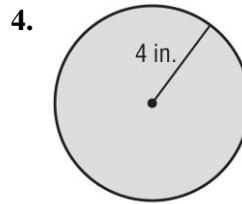
Area: _____
Circumference: _____



Area: _____
Circumference: _____

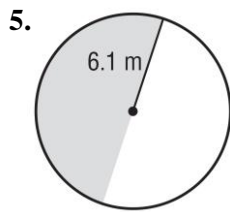


Area: _____
Circumference: _____

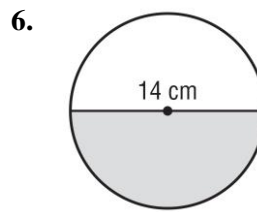


Area: _____
Circumference: _____

Find the area of each semicircle. Round to the nearest tenth.



Area: _____



Area: _____